

- 1 Write these numbers in order of size, starting with the smallest.

5.024 0.524 5.204 5.0204

Answer < < < [1]
smallest

- 2 At midnight the temperature in Newtown was -8°C .
 At noon the next day the temperature in Newtown was 9°C .

Work out the rise in temperature from midnight to noon.

Answer $^{\circ}\text{C}$ [1]

- 3 Simplify $\frac{r^6}{r^2}$.

Answer [1]

- 4 (a) Work out $\frac{5}{12}$ of 168.

Answer(a) [1]

- (b) Write $\frac{3}{8}$ as a decimal.

Answer(b) [1]

5 Calculate.

(a) $3.2 \times (5.7 - 1.3) + 4.8$

Answer(a) [1]

(b) $\sqrt{2.54 - 0.85}$

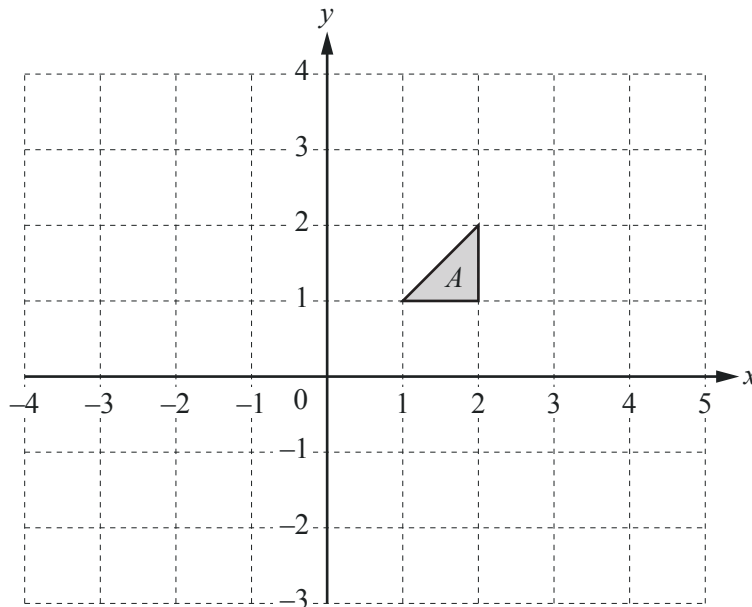
Answer(b) [1]

6 $\mathbf{p} = \begin{pmatrix} 4 \\ -2 \end{pmatrix}$ $\mathbf{q} = \begin{pmatrix} -1 \\ 3 \end{pmatrix}$

Work out $3\mathbf{p} - \mathbf{q}$.

Answer $\begin{pmatrix} \\ \end{pmatrix}$ [2]

7



Draw the image of shape A after a translation by the vector $\begin{pmatrix} 2 \\ -3 \end{pmatrix}$. [2]

- 8 Pip and Ali share \$785 in the ratio Pip:Ali = 4:1.

Work out Pip's share.

Answer \$ [2]

- 9 Jim scores the following marks in 8 tests.

7 8 8 y 6 9 10 5

His mean mark is 7.5 .

Calculate the value of y .

Answer $y =$ [2]

- 10 By writing each number correct to 1 significant figure, estimate the value of $\frac{\sqrt{3.9} \times 29.3}{8.9 - 2.7}$.

Show all your working.

Answer [2]

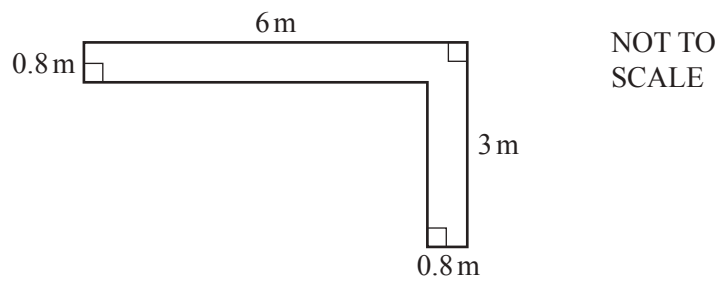
- 11 Without using a calculator, work out $\frac{2}{5} \div \frac{3}{4}$.

Give your answer as a fraction.

You must show each step of your working.

Answer [2]

12



Leah is making a path in her garden using gravel.

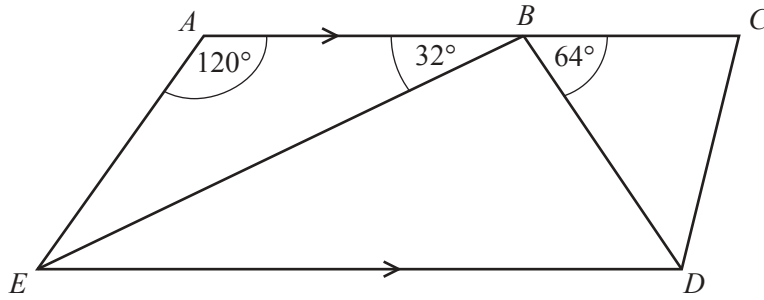
The diagram shows the path.

A bag of gravel covers an area of 0.5 m^2 .

Work out the number of bags of gravel Leah must buy to make the path.

Answer [3]

13

NOT TO
SCALE

The diagram shows quadrilateral $ACDE$.
 AC is parallel to ED and B is a point on AC .
 Angle $EAB = 120^\circ$, angle $ABE = 32^\circ$ and angle $CBD = 64^\circ$.

(a) Work out angle EBD .

Answer(a) Angle $EBD = \dots\dots\dots$ [1]

(b) Work out angle AEB .

Answer(b) Angle $AEB = \dots\dots\dots$ [1]

(c) Complete this statement.

Angle $BED =$ angle ABE because they are $\dots\dots\dots$ angles. [1]

14 Work out the size of one interior angle of a regular 15-sided polygon.

Answer $\dots\dots\dots$ [3]

- 15 Chico has a bag of sweets.
He takes a sweet from the bag at random.
The table shows the probabilities of taking each flavour of sweet.

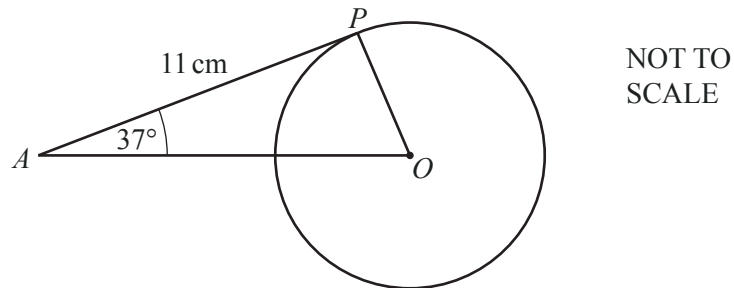
Flavour	Lemon	Lime	Strawberry	Blackcurrant	Orange
Probability	0.15	0.22		0.18	0.24

(a) Complete the table. [2]

(b) Find the probability that the sweet is lemon or lime.

Answer(b) [1]

16



In the diagram, AP is a tangent to the circle at P .
 O is the centre of the circle, angle $PAO = 37^\circ$ and $AP = 11$ cm.

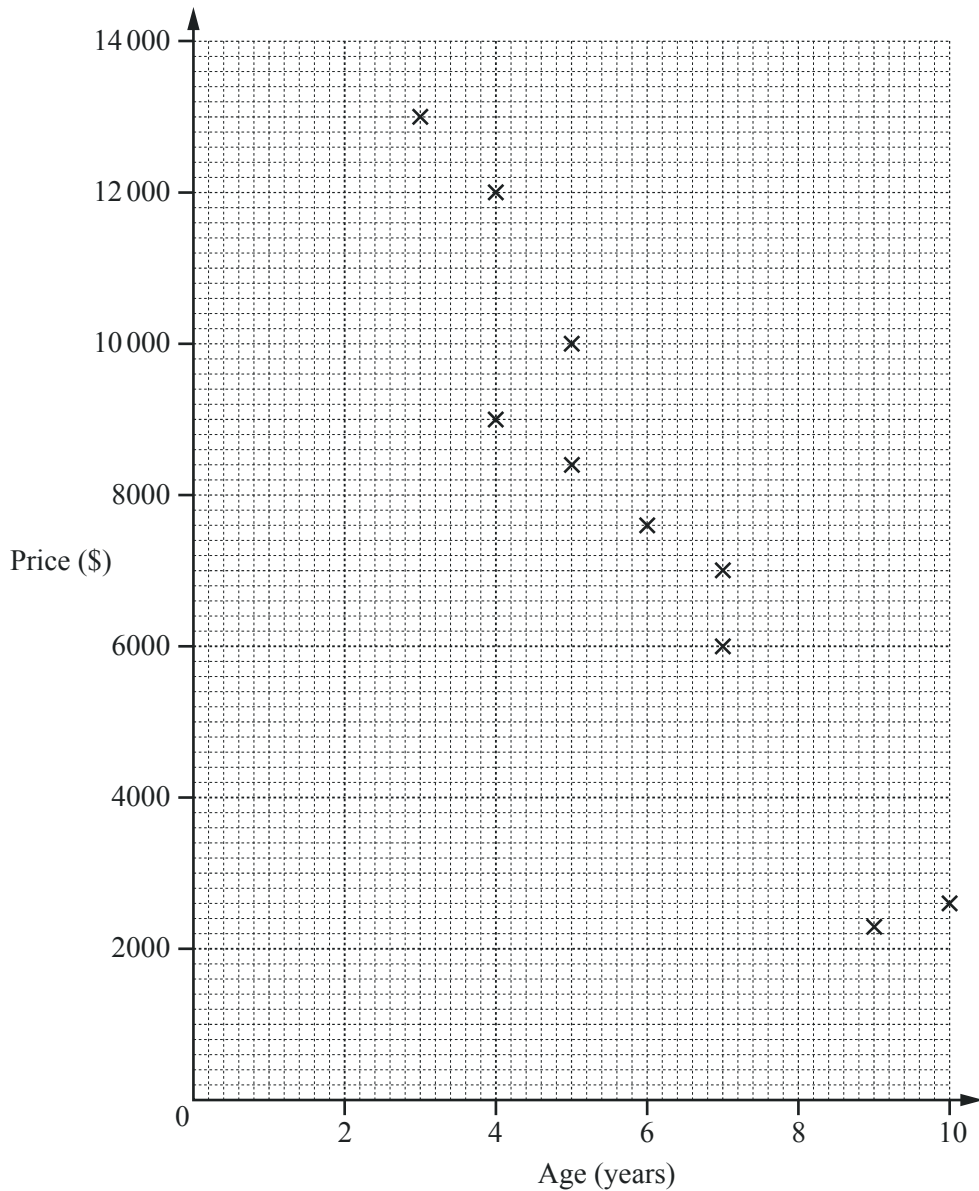
(a) Write down the size of angle OPA .

Answer(a) Angle $OPA =$ [1]

(b) Work out the radius of the circle.

Answer(b) cm [2]

- 17 Amir looks at adverts for the same model of car.
The scatter diagram shows the age and price of each car.



- (a) What type of correlation is shown on the scatter diagram?

Answer(a) [1]

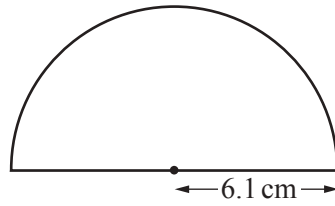
- (b) Draw a line of best fit on the scatter diagram.

[1]

- (c) Use your line of best fit to estimate the price of a car that is 8 years old.

Answer(c) \$ [1]

18

NOT TO
SCALE

A protractor is a semi-circle of radius 6.1 cm.

Calculate the **perimeter** of the protractor.

Answer cm [3]

19 (a) $s = 4t + 3u$

Calculate s when $t = 2.6$ and $u = -0.4$.

Answer(a) $s =$ [2]

(b) Solve $5x - 7 = 10$.

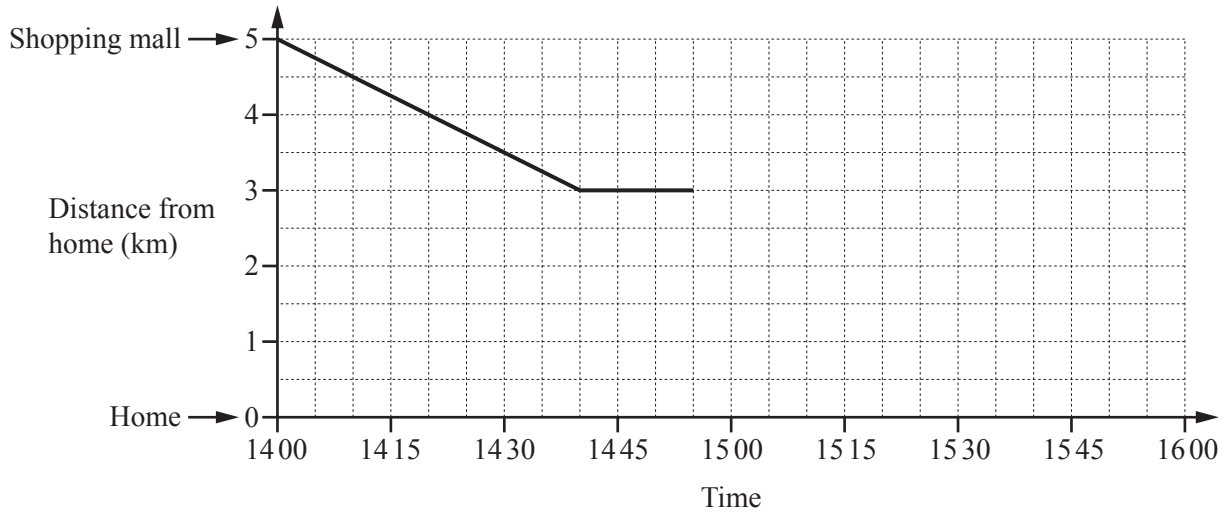
Answer(b) $x =$ [2]

- 20 (a) Maria travels by bus to the shopping mall.
She leaves home at 11 50 and arrives at the shopping mall at 12 17.

How many minutes does it take Maria to travel from home to the shopping mall?

Answer(a) min [1]

(b)



Maria walks home from the shopping mall.
The travel graph shows part of her journey.

- (i) Maria stops at her friend's house on the way home.

How far from the shopping mall does her friend live?

Answer(b)(i) km [1]

- (ii) Maria leaves her friend's house at 14 55.
She walks the rest of the way home at a constant speed of 4 km/h.

Complete the travel graph.

[2]

- 21 (a) Sara works for 28 hours each week.
She earns \$12.45 per hour.

Calculate how much she earns in one week.

Answer(a) \$ [1]

- (b) Sara invests \$750 for 3 years at a rate of 2.4% per year compound interest.

Calculate the total amount she will have at the end of the 3 years.

Answer(b) \$ [3]

- 22 (a) Write down the next term in each of these sequences.

(i) 5 9 13 17 ...

Answer(a)(i) [1]

(ii) 3 6 12 24 ...

Answer(a)(ii) [1]

- (b) Here are the first four terms in a different sequence.

2 7 12 17

Find an expression for the n th term of this sequence.

Answer(b) [2]

BLANK PAGE

Permission to reproduce items where third-party owned material protected by copyright is included has been sought and cleared where possible. Every reasonable effort has been made by the publisher (UCLES) to trace copyright holders, but if any items requiring clearance have unwittingly been included, the publisher will be pleased to make amends at the earliest possible opportunity.

To avoid the issue of disclosure of answer-related information to candidates, all copyright acknowledgements are reproduced online in the Cambridge International Examinations Copyright Acknowledgements Booklet. This is produced for each series of examinations and is freely available to download at www.cie.org.uk after the live examination series.

Cambridge International Examinations is part of the Cambridge Assessment Group. Cambridge Assessment is the brand name of University of Cambridge Local Examinations Syndicate (UCLES), which is itself a department of the University of Cambridge.